



Name _____

Class _____ Roll no. _____

World Map

1. Label the 7 continents and the 5 oceans on the following world map.

a. The earth is like a globe. However, this map is flat. Do you agree that the earth's surface near the poles on a flat map appears larger than it is? _____



- b. Which is the largest continent? _____ c. Which is the largest ocean? _____
- d. On which continent do you live? _____
- e. What is the order of the planet earth from the Sun? _____ f. Which is the largest rock in the solar system? _____
- g. Which is the only planet in the solar system with only one Moon? _____



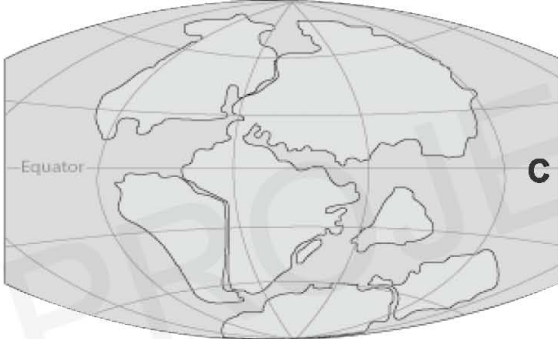
Match the following.



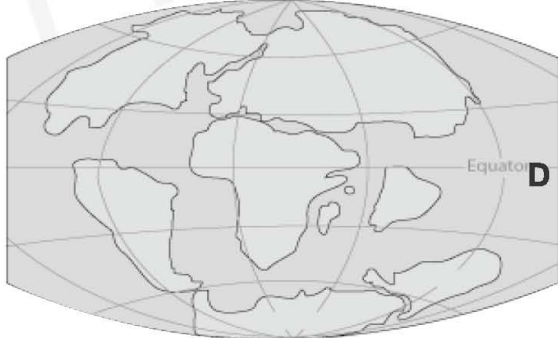
1. JURASSIC
145 million
years ago



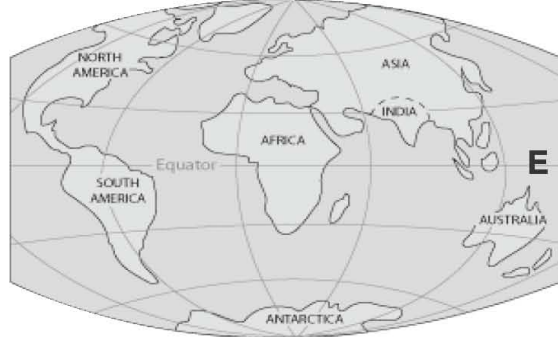
**2. PRESENT
DAY**



3. CRETACEOUS
65 million
years ago



4. PERMIAN
250 million
years ago



5. TRIASSIC
200 million
years ago



Match the following.

- | | |
|--|--|
| 1. Evolution of life | A. Non-renewable fossil fuels |
| 2. Nature's delicate balance | B. Rise in sea levels |
| 3. Heaven and hell | C. Carbon foot print |
| 4. Cradle of the human species | D. A single hour is almost 2 million years |
| 5. Cosmic Calendar | E. Hot sulphur geysers |
| 6. Trapped | F. Trapped Greenhouse gas Co ₂ |
| 7. Where there is a will, there is a way | G. Alternative power sources |
| 8. Time is running out! | H. Africa |
| 9. Now or never | I. Greenhouse gas Co ₂ |
| 10. Mending our ways | J. Domino effect |
| 11. Prevention is better than cure | K. Ozone |