


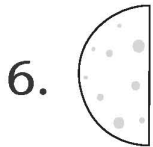
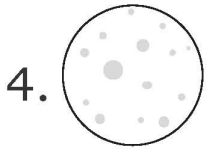
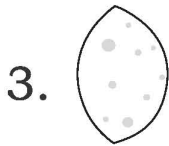
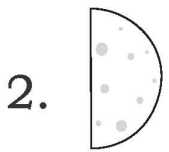


Name _____

Class _____ Roll no. _____

Over the Moon

Match the phases of the Moon with their correct names.



a. Third Quarter

b. Full Moon

c. Waxing Gibbous

d. New Moon

e. Waning Gibbous

f. Waxing Crescent


g. First Quarter

h. Waning Crescent




Name _____


Class _____ Roll no. _____




A ← 1



B 2



C 3



D 4



E 5




F 6



G 7



H 8



I ← 9

Arrange the 9 Moon phases in order from the New Moon phase to the New Moon phase. A few have been done for you.

